


Wednesday 3rd March 2021

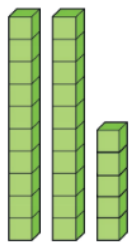
Can I find one less?

Find 2 different objects to represent tens and ones


Make the number below using your tens and ones.



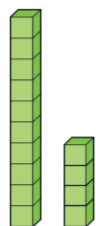
Then find one less by taking away 1.



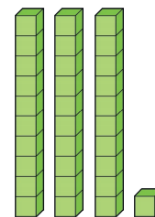
One less




One less



One less



One less



Mrs Pursey had 32 highlighters. She gives one to Miss Wagland. How many highlighters does Mrs Pursey have left?

Joey has 45 footballs. He gives one football to Bailey. How many footballs does Joey have now?

Eva has 24 colouring pencils. She gives one to Elsie-May. How many pencils does Eva have left?

Frankie has 17 cubes. He gives one to Olivia. How many cubes does Frankie have now?

One More and One Less - Challenge Cards

3. Asif thinks of a number.

- What is Asif's number?
- Explain how you know using a number line or equipment.

37 is one less than my number.



One More and One Less - Challenge Cards

7. What pattern is created if you keep finding 2 less than a number?

- Start at 20 and explore the pattern.

20

- Can you make a rule about what you notice?