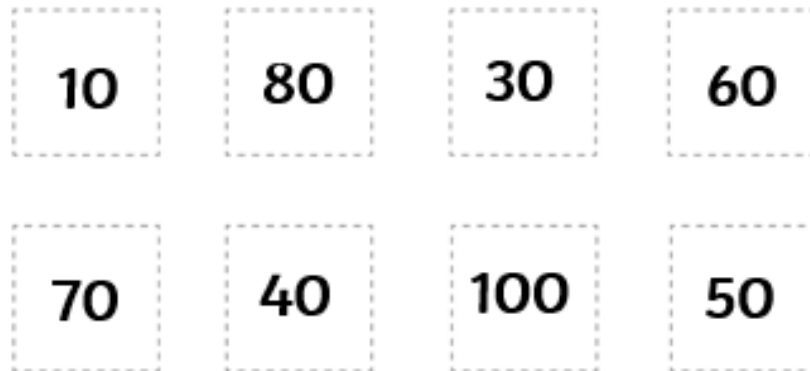


Monday 22nd February 2021

Can I count in 10s?

	20							90	
--	----	--	--	--	--	--	--	----	--



2a. Max is planting seeds.

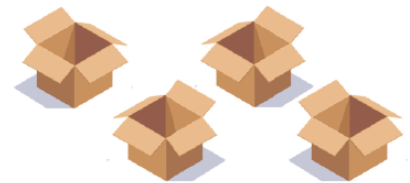
Each pack of seeds has 10 seeds.



Does he have enough seeds to plant 40 flowers?

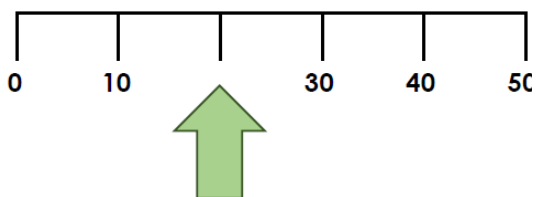
2b. Cam is packing her toys.

Each box will hold 10 teddies.



Does she have enough boxes to pack 50 teddies?

3a. Viv thinks the arrow is pointing to 10.



Is she correct? Explain how you know.

