

# Convert pounds and pence

1 a) Circle £1



b) Circle £1



c) Circle £1




d) Circle £10



2 How many 1p coins do you need to make £1?

3 Write the price of each item in pence.



£1 and 24p

 p


£2 and 24p

 p


£6 and 45p

 p

4 Write each amount in pounds and pence.

a) 274p = £  and  p    b) 592p = £  and  p

374p = £  and  p    591p = £  and  p

474p = £  and  p    590p = £  and  p

c)  $111\text{p} = \text{£} \square$  and  $\square \text{p}$

d)  $405\text{p} = \text{£} \square$  and  $\square \text{p}$

- 5 Annie has some coins.



a) How much money does Annie have?  $\text{£} \square$  and  $\square \text{p}$

b) What is 10p more?  $\text{£} \square$  and  $\square \text{p}$

What is 10p less?  $\text{£} \square$  and  $\square \text{p}$

c) What is 100p more?  $\text{£} \square$  and  $\square \text{p}$

What is 100p less?  $\text{£} \square$  and  $\square \text{p}$


- 6 What amount is represented in each box?



$\text{£} \square$  and  $\square \text{p}$




$\text{£} \square$  and  $\square \text{p}$



$\text{£} \square$  and  $\square \text{p}$

- 7 Eva empties out her money box.



How much money was in her money box?  $\text{£} \square$  and  $\square \text{p}$

How did you count the coins? Compare with a partner.

- 8 a) What is the fewest number of coins you can use to represent 315p?

\_\_\_\_\_

- b) Use 6 coins to make an amount that is more than £3, but less than £4. Draw your answer.



Compare answers with a partner.