

Wednesday 13th January 2021

Can you use the part whole model to solve subtraction number sentences?

$11 - 5 =$

$12 - 4 =$

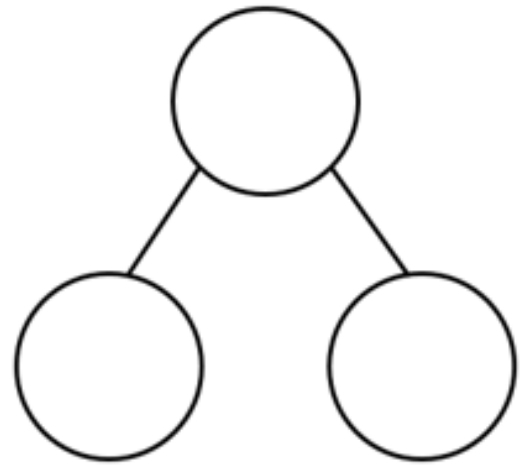
$13 - 5 =$

$17 - 5 =$

$12 - 3 =$

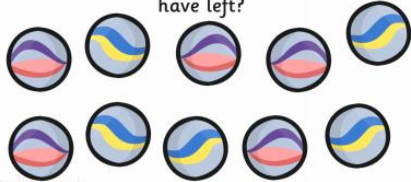
$16 - 7 =$

$18 - 2 =$

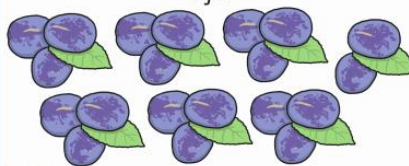


Now try these:

If you had 10 marbles and 2 of them have rolled away, how many of them would you have left?



If you had 20 plums and you use 13 to make jam, how many would you have left?



If you had 20 milk cartons and drink 2 of them, how many would you have left?



If you had 5 fish fingers in a box and you cooked 4 of them, how many fish fingers would you have left in the box?

