


Thursday 28th January 2021

Finding 1 more

Can you make the numbers using tens and ones first? Now add one more. Can you write this as a number sentence too? Remember you can also use your jottings on the pictures below.

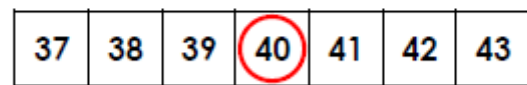

Extension, also find 2 more? What do you notice?

Complete the sentences.



There are straws.

One more than is .



One more is .

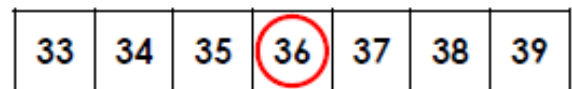
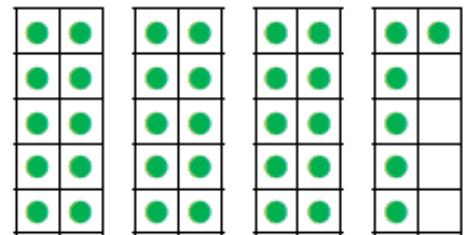
9a. Circle the number that is one more than the amount shown below.



34

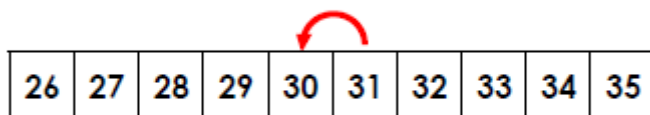
49

41



One more is .

6b. Emma has drawn a number track to show one less than 30.



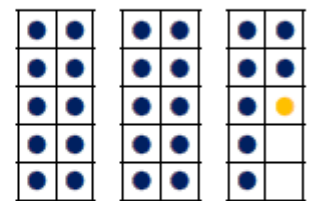
Is she correct? Explain your answer.

2a. Which is the odd one out?

A.

One more than
37 is 38.

B.



C.

