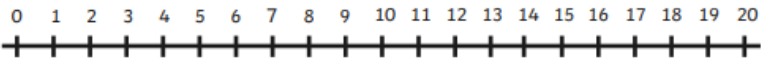
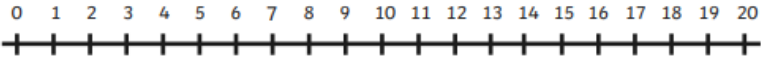
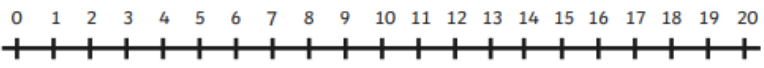
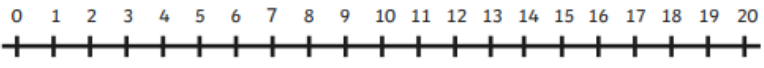
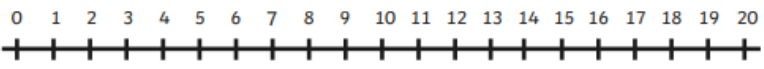
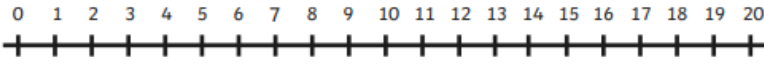
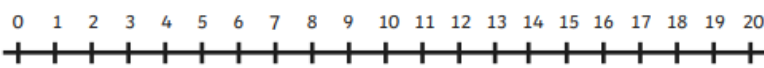
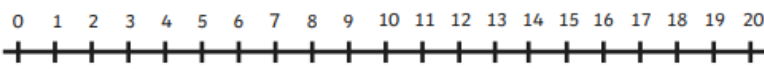


Thursday 14th January 2021

Can you use the number lines to subtract?

$20 - 3 =$	
$9 - 4 =$	
$18 - 2 =$	
$10 - 6 =$	
$7 - 3 =$	
$11 - 8 =$	
$15 - 3 =$	
$6 - 1 =$	

Use chalk, paper or real objects to create your own. Can you jump and subtract?

Use your own number line to solve:

$$12 - 3 =$$

$$19 - 5 =$$

$$18 - 4 =$$

$$17 - 3 =$$