


# Pounds and pence

1 Match the amounts that are equal.


16p



twenty-five pence



£25



sixty pence



twenty pounds



2 How much money does each person have?

a) £


b)  p

c)  p

3



I can make the same amount of money in many ways.



What amount has Mo made? £

Make this amount another way.

Draw your coins.



Compare answers with a partner. Is there another way?




4 Dora earns £10 for walking the dog.

Tick the money Dora is given.

		
<input type="checkbox"/>	<input type="checkbox"/>	<input type="checkbox"/>

5 Count the money.

a)  £  and  p

b)  £  and  p

c)  £  and  p

d)  £  and  p

e)  £  and  p

6 Jack has 4 silver coins and Rosie has 5 silver coins.

Show that Jack can have more money than Rosie.

Compare answers with a partner.

