

Friday 5<sup>th</sup> February 2021





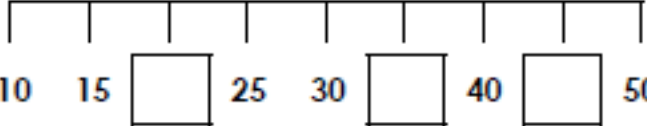

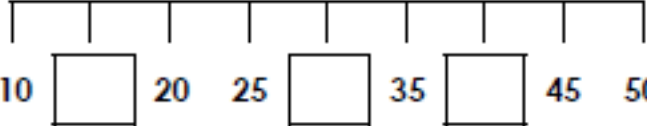





Can I count in 5s?

Sing this song as a warm up

<https://www.youtube.com/watch?v=56eWo7QbLT4>

Practise counting in 5s forwards and backwards.

Now try these:

<p>5a. Count in 5s and complete the sentence below.</p>  <p>The value of the dice is <input type="text"/> .</p> <p> VF</p>	<p>5b. Count in 5s and complete the sentence below.</p>  <p>The value of the dominoes is <input type="text"/> .</p> <p> VF</p>
<p>6a. Fill in the missing numbers on the number line.</p>  <p> VF</p>	<p>6b. Fill in the missing numbers on the number line.</p>  <p> VF</p>
<p>7a. Lola has put flowers into vases.</p>  <p>There are <input type="text"/> flowers in each vase.</p> <p>There are <input type="text"/> vases.</p> <p>There are <input type="text"/> flowers altogether.</p> <p> VF</p>	<p>7b. Tom has put marbles into bags.</p>  <p>There are <input type="text"/> marbles in each bag.</p> <p>There are <input type="text"/> bags.</p> <p>There are <input type="text"/> marbles altogether.</p> <p> VF</p>