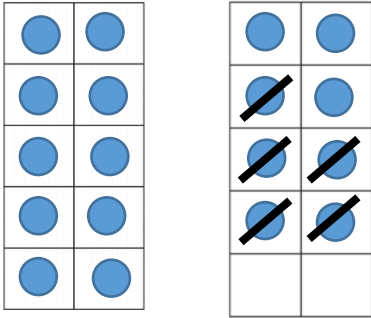
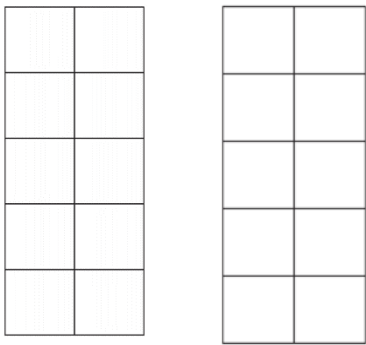


Alexa has 18 boxes. She gives 5 to Mason. How many boxes does she have now?

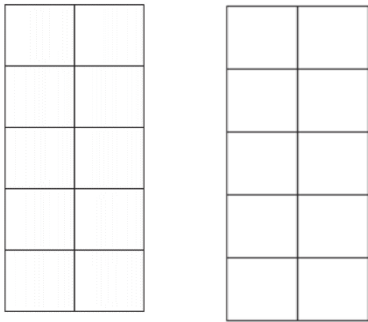
$$18 - 5 = 13$$



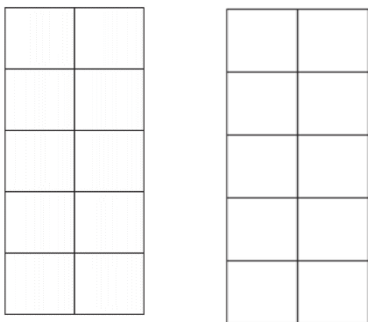
Millie-Mae plays with 16 dolls. She gives 6 to Amelia. How many dolls does she have now?



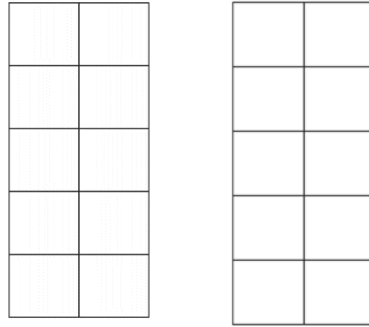
Riley has 12 cars. He gives 2 to Chase. How many does he have now?



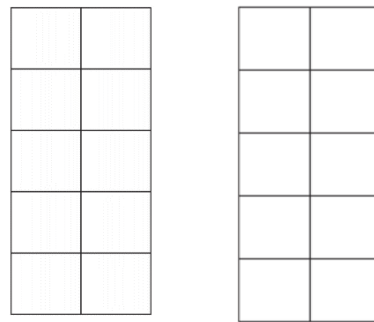
Aurora has 15 books. She gives 3 to Skye. How many does she have now?



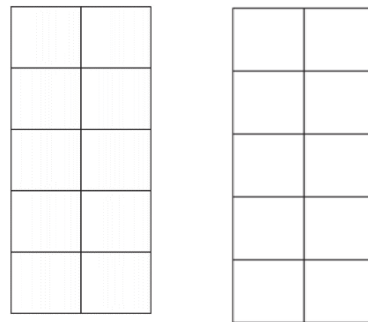
Evie has 19 pens. She gives 3 to Logan. How many pens does she have now?



Brihanna has 14 bags. She gives 3 to Harrison. How many does she have now?



Mason has 13 toys. He gives 2 to Alfie. How many does he have now?



Teddy has 11 pencils. He gives 1 to Buddy. How many does he have now?

