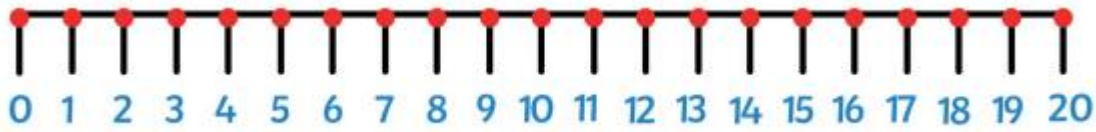
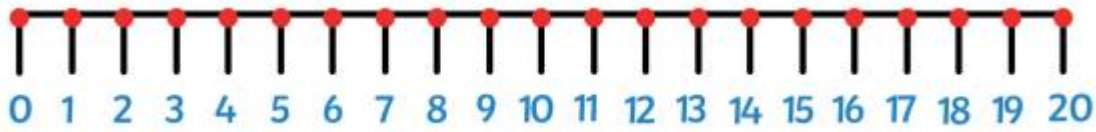


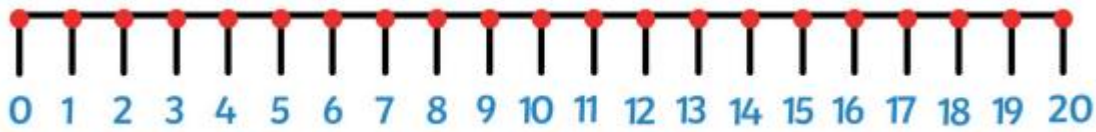
$$\boxed{15} - \boxed{\phantom{00}} = \boxed{14}$$



$$\boxed{18} - \boxed{\phantom{00}} = \boxed{13}$$



$$\boxed{17} - \boxed{\phantom{00}} = \boxed{11}$$



$$\boxed{20} - \boxed{\phantom{00}} = \boxed{14}$$



$$\boxed{16} - \boxed{\phantom{00}} = \boxed{12}$$

