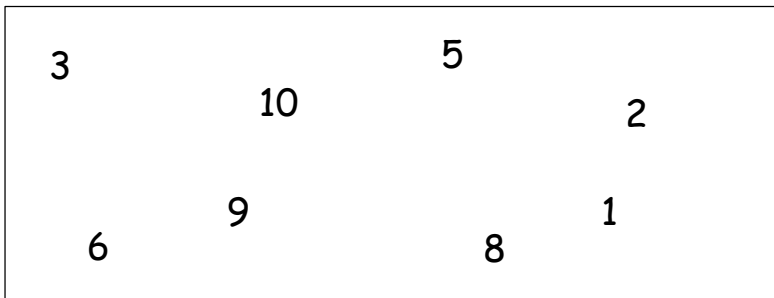


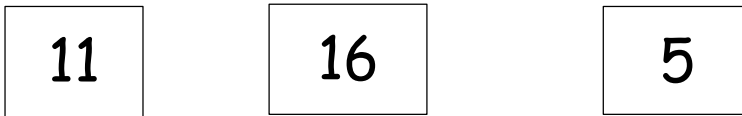
1. I am thinking of the number 11.

What number do I choose out of the box to make:

- 14
- 19
- 12



2. I have 3 number cards.



Can you write 4 addition number sentences?

$$\underline{\quad} + \underline{\quad} = \underline{\quad} \quad \underline{\quad} + \underline{\quad} = \underline{\quad}$$
$$\underline{\quad} = \underline{\quad} + \underline{\quad} \quad \underline{\quad} = \underline{\quad} + \underline{\quad}$$

3. A one-digit number is added to a two-digit number. The answer is 18.

What could the missing numbers be?

How many number sentences can you find?




First

Then

Now

4.



What numbers could the  and  be?

How many examples can you find?